

# Version 4 Homework – 15.11.24



## Maths

1) Calculate  $8,932 - 4,743$

5) Find the difference between 7,000 and 3,465

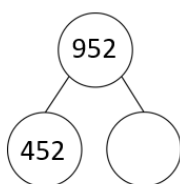
2) Increase 6,482 by 1,349

6) Calculate  $4,829 + 3,798$

3) Round 48 to the nearest 100

7) Round 9,632 to the nearest thousand.

4) Complete the part-whole model.



8) Calculate  $295 + 6$

## English

Circle the **co-ordinating conjunction** in the sentence below.

I started drawing a car, but then I changed my mind because I had a better idea.

Circle the most suitable **conjunction** to complete the sentence below.

Amrit still managed to smile \_\_\_\_\_ he was feeling very tired.


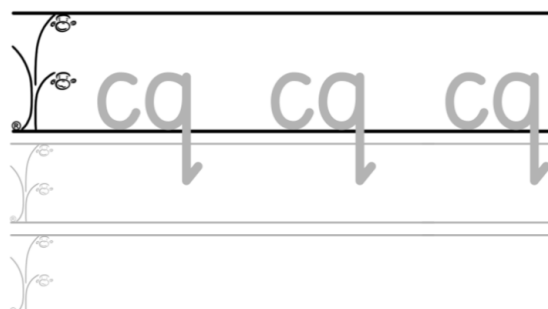
although      because      before      and

Circle the **conjunction** in each sentence.

We like to eat popcorn when we go to the cinema.

Although my sister likes salted popcorn, I prefer sweet popcorn.

My brother doesn't like popcorn at all, so he buys sweets instead



Please login to Spelling Shed and complete your spelling practise. If you have forgotten your login please speak to class teachers.

## Reading

Please read to an adult and record in your reading diary.

## Times tables



Please login to Tackling Tables.