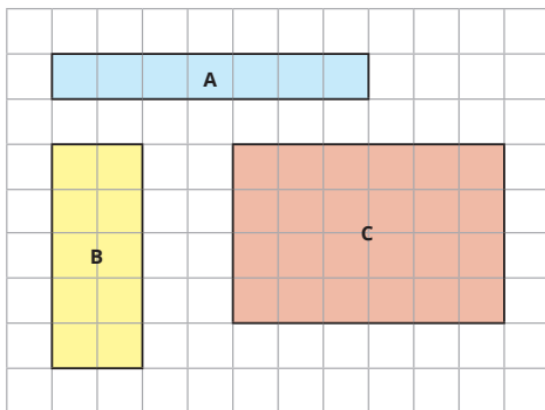


# Version 4 Homework – 22.11.24



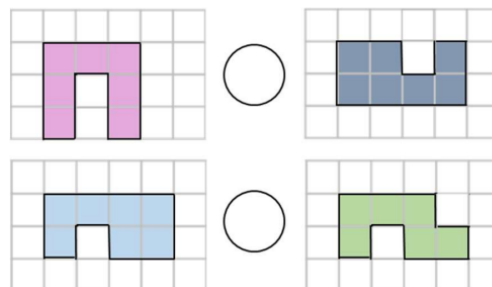
## Maths

Find the area of each rectangle.



A =  squares B =  squares C =  squares

Use <, > or = to compare the areas.



Tick the shape with the greatest area.



## English

Circle the **co-ordinating conjunction** in the sentence below.

I started drawing a car, but then I changed my mind because I had a better idea.

Circle the most suitable **conjunction** to complete the sentence below.

Amrit still managed to smile \_\_\_\_\_ he was feeling very tired.

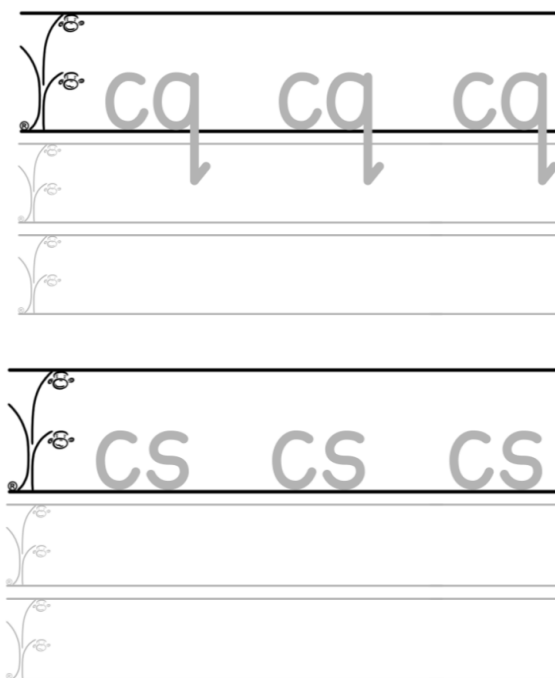
although because before and

Circle the **conjunction** in each sentence.

We like to eat popcorn when we go to the cinema.

Although my sister likes salted popcorn, I prefer sweet popcorn.

My brother doesn't like popcorn at all, so he buys sweets instead



Please login to Spelling Shed and complete your spelling practise. If you have forgotten your log-in please speak to class teachers.

## Reading

Please read to an adult and record in your reading diary.

## Times tables



Please login to Tackling Tables.